

Total No. of Questions : 8]

SEAT No. :

PB3616

[6261]-21

[Total No. of Pages : 3

S. E. (Electronics / E&Tc/E&CE)

SIGNALS AND SYSTEMS

(2019 Pattern) (Semester - IV) (204191)

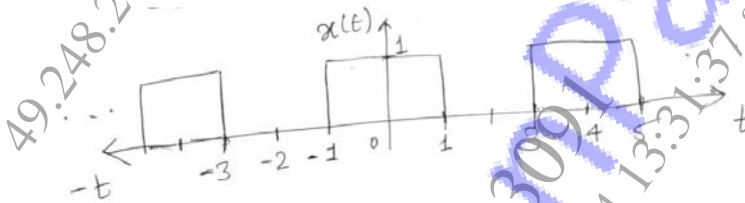
Time : 2½ Hours]

[Max. Marks : 70

Instructions to the candidates:

- 1) Solve Q.1 or Q.2, Q.3 or Q.4, Q.5 or Q.6, Q.7 or Q.8.
- 2) Figures to the right indicate full marks.
- 3) Draw neat figures wherever necessary.
- 4) Assume suitable data if necessary.
- 5) Use of scientific calculator is allowed.

Q1) a) Find the Trigonometric Fourier series for a given signal  $x(t)$  [8]



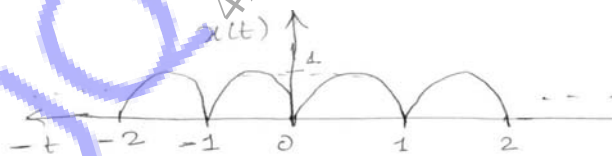
b) State and explain physical significance of fourier series properties given below. [6]

- i) Time scaling
- ii) Time Differentiation
- iii) Time Reversal

c) Explain Gibb's Phenomenon [4]

OR

Q2) a) Determine exponential Fourier Series for the signal given  $x(t)$ . [8]

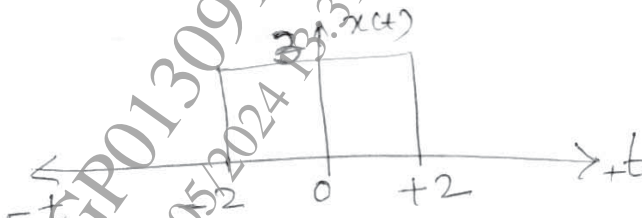


b) Check whether  $\cos(\omega t)$  and  $\cos(2\omega t)$  are orthogonal to each other. [6]

c) State Dirichlet conditions for the existence of Fourier series. [4]

P.T.O.

- Q3)** a) Determine the Fourier Transform of  $x(t) = e^{-3t} \cdot u(t)$ . Also, plot magnitude and phase spectrum. [8]  
 b) Define Frequency shifting property of CTFT and find the Fourier Transform of  $x(t) = \cos(\omega_0 t) \cdot u(t)$ . [6]  
 c) Determine the Fourier Transform of the signal given below. [3]



OR

- Q4)** a) Find the Fourier Transform of  $\text{signum}(t)$ . [8]  
 b) Find the Fourier Transform of following signals using properties of CTFT  
 i)  $\delta(t - 3)$   
 ii)  $3\delta(t) + 2e^{-dt}u(t)$  [6]  
 c) Explain magnitude and phase response. [3]

- Q5)** a) Determine the Laplace Transform of the signal given below. Sketch ROC. [8]



- b) Define ROC. List the properties of ROC. [6]  
 c) Find the Laplace transform of following signals using properties [4]  
 i)  $x(t) = u(t - 4)$   
 ii)  $x(t) = r(2t)$

OR

- Q6)** a) Determine the Inverse Laplace Transform. [8]

$$X(s) = \frac{2}{S(S+1)(S+2)} \text{ with}$$

ROC specified  $-1 < \sigma < 0$

( $\sigma = \text{sigma}$ )

- b) Find the initial and final values of given function [6]

$$x(s) = \frac{2s + 3}{s^2 + 5s + 6}$$

- c) Compare Fourier Transform and Laplace Transform. [3]

- Q7) a) State the properties of PDF. [9]  
For a given CDF,

$$F_X(x) = \begin{cases} 0 & x \leq 0 \\ Kx^2 & 0 < x \leq 10 \\ 100K & \text{for } x > 10 \end{cases}$$

Find K,  $P(X \leq 5)$  and  $P(5 < X \leq 7)$  plot the corresponding PDF.

- b) Define probability. A box contains 4 white, 5 Red and 7 black balls. A ball is drawn randomly from a box. Find the probability that [9]
- a ball is Red,
  - a ball is not white
  - a ball is black or white.

OR

- Q8) a) PDF of a random variable is as given below [9]

$$f_X(x) = \begin{cases} \frac{1}{2\pi} & 0 \leq x \leq 2\pi \\ 0 & \text{otherwise} \end{cases}$$

Calculate:

- Mean Value
  - Mean Square Value
  - Variance
  - Standard Deviation
- b) A coin is tossed three times. Write the sample space which gives all possible outcomes. Random variable X, Represents the number of heads on any tripletors. [8]  
Calculate and draw CDF and PDF.

